

Affiliation No : 330881

GD GOENKA PUBLIC SCHOOL

Under the Aegis of G D Goenka Group , New Delhi


PURNEA

DIWALI & CHHATH HOLIDAY ENGAGEMENT

2024-25

GRADE

UKG



HIGHER > STRONGER > BRIGHTER



Affiliation No : 330881

GD GOENKA PUBLIC SCHOOL

Under the Aegis of G D Goenka Group , New Delhi

PURNEA

Dear Parents,

As we celebrate the festival of Diwali & Chhath, we want to extend our warmest wishes to you and your families. In light of the holiday season, we have assigned a special Diwali homework for your child. This assignment is an attempt to channelize the creative energy of the children, and we encourage you to engage with them in this learning process. We hope you have a joyful and safe Diwali celebration with your loved ones.

Instructions for students:

1. Homework should be completed as per the given instructions, whether on A4 paper, Chart Paper, in a notebook, or on a computer.
2. It should be labelled properly indicating the name, class and section of the child.
3. Homework will be assessed based on neat handwriting, presentation, creativity, and timely submission of the work.
4. Revise the syllabus for the MAT 4 Examination and prepare thoroughly for it.
5. Spend time with family and friends to make this festive season joyful and cheerful.



HIGHER > STRONGER > BRIGHTER



Affiliation No : 330881

GD GOENKA PUBLIC SCHOOL
Under the Aegis of G D Goenka Group , New Delhi **PURNEA**

HOLIDAY ENGAGEMENT

2024-2025

Grade UKG

NAME - _____

1. Draw a line to match each picture with its opposite:

fast		●	●		cold
long		●	●		back
hot		●	●		night
front		●	●		slow
full		●	●		sad
day		●	●		short
happy		●	●		empty

HIGHER > STRONGER > BRIGHTER



2. Complete the words by using 'll or ss':

I. fa___ she___ spi___ sme___

II. gra___ pre___ cla___ gla___

3. Colour the box correctly for each picture:



person
things



things
person



animal
thing



person
animal



thing
person



thing
animal



4. Daily write one sentence in one full page of your notebook:

1. It is a small fish.

2. We have a class pet.

3. We call it Fluff.

4. Fluff lives in a glass bowl.

5. We have put some rocks in the bowl.

6. Fluff swims all day.



Affiliation No : 330881

GD GOENKA PUBLIC SCHOOL
Under the Aegis of G D Goenka Group , New Delhi **PURNEA**

Hindi

1. बगुला और कछुआ का पठन।
2. चित्र पहचानकर नाम लिखो।





3. वर्ण जोड़कर शब्द लिखो।

गु+ ला+ ब = _____

क+ बू+त+ र = _____

झू+ ला = _____

कु+ म् + हा+ र = _____

के+ ला = _____

नै + नी+ ता + ल = _____

HIGHER > STRONGER > BRIGHTER



Affiliation No : 330881

GD GOENKA PUBLIC SCHOOL
Under the Aegis of G D Goenka Group , New Delhi **PURNEA**

4. चित्र देखकर सही शब्द लिखकर वाक्य पूरा करो।



राजू _____ झूला।



_____ घर आया।



मीठा _____ खा।

HIGHER > STRONGER > BRIGHTER



Affiliation No : 330881

GD GOENKA PUBLIC SCHOOL
Under the Aegis of G D Goenka Group , New Delhi **PURNEA**



_____ घर में रख।

5. नैनीताल की सैर कहानी का हिंदी सुलेख लिखिए।

1) एक दिन नैना नैनीताल गई।

2) लैला भी उसके साथ गई।

3) उसके पास एक थैला था।

4) थैला बड़ा था।

5) कैलाश ने थैला पकड़ लिया।

6) लैला नाव पर बैठ गई।

**MATHEMATICS**

1. Place your finger on each box and count from 1 to 50.

Start from ten colour every 10th number.

1	2	3	4	5	6	7	8	9	10
11	12	13	14	15	16	17	18	19	20
21	22	23	24	25	26	27	28	29	30
31	32	33	34	35	36	37	38	39	40
41	42	43	44	45	46	47	48	49	50

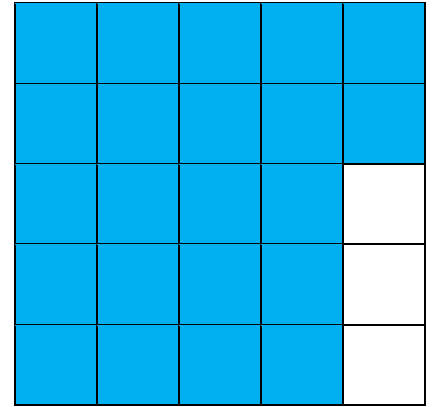
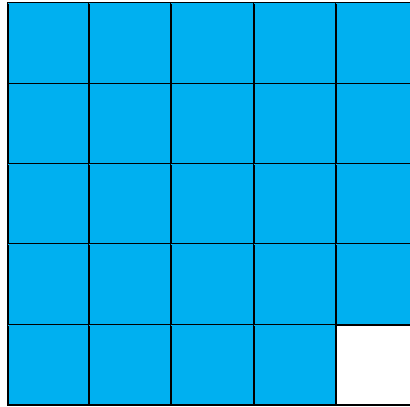
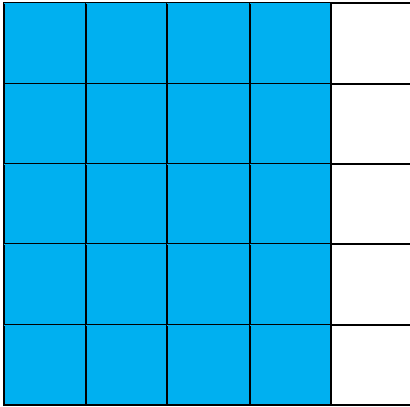
❖ The numbers I coloured are 10

2. Write the number names: -

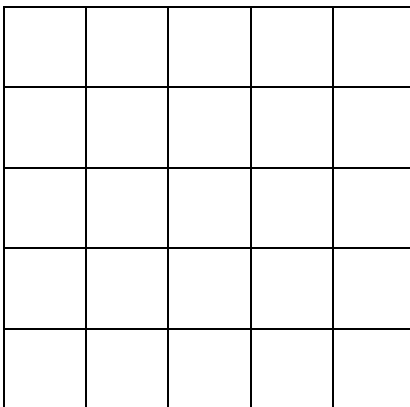
20		26	
21		27	
22		28	
23		29	
24		30	
25		31	
32		33	
34		35	



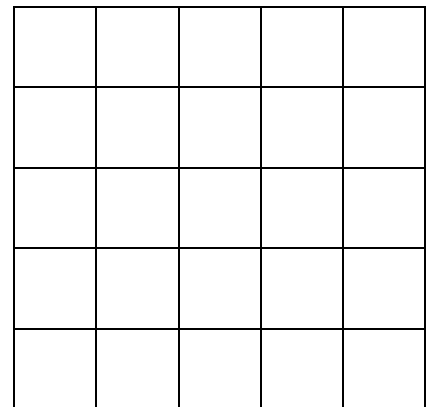
3. Count the shaded boxes and write the numbers in words: -



4. Colour the blocks and make dots and marbles to represent the given number.



21



_____ tens and _____ ones



5. Add and subtract the following: -

a) $20 + 30 =$ _____

b) $40 - 20 =$ _____

c) $33 + 10 =$ _____

d) $42 - 12 =$ _____

e) $20 + 14 =$ _____

6. Draw and write the correct answers in the given boxes: -

a) Nikita has 20 marbles. She gives 12 marbles to Amina. How many marbles are left with her now?

T	O

b) Ziya has 25 mangoes .Nisha has 14 mangoes .How many mangoes do they have together?

T	O



Affiliation No : 330881

GD GOENKA PUBLIC SCHOOL
Under the Aegis of G D Goenka Group , New Delhi **PURNEA**

ENVIROMENTAL SCIENCE

1. Make a Clay model of two insects.



HIGHER > STRONGER > BRIGHTER



Affiliation No : 330881

GD GOENKA PUBLIC SCHOOL
Under the Aegis of G D Goenka Group , New Delhi **PURNEA**

2. Answer the question in one word.

1. Does an ant fly or walk?

2. Do elephants have a trunk or horns?

3. Does a fish have wings or fins?

4. Do tigers have strips or spots?

5. Who sways on a tree, fish or monkey?

3. Draw a picture of any one of your favourite pet animal:



Affiliation No : 330881

GD GOENKA PUBLIC SCHOOL
Under the Aegis of G D Goenka Group , New Delhi **PURNEA**

4. Match the animals with their sounds:

dog

chirps

birds

bark

lion

meow

pig

moo

cow

grunt

cat

roar

fish

croak

frog

click



Affiliation No : 330881

GD GOENKA PUBLIC SCHOOL
Under the Aegis of G D Goenka Group , New Delhi **PURNEA**

Computer

1. On a chart paper, draw a colorful picture of a computer and Name the Parts of Computer.

Example:





Affiliation No : 330881

GD GOENKA PUBLIC SCHOOL
Under the Aegis of G D Goenka Group , New Delhi **PURNEA**

HAPPY
Diwali
FESTIVAL OF LIGHTS



HIGHER > STRONGER > BRIGHTER