

Affiliation No : 330881

# GD GOENKA PUBLIC SCHOOL


Under the Aegis of G D Goenka Group , New Delhi

# PURNEA

## DIWALI & CHHATH HOLIDAY ENGAGEMENT

2024-25

GRADE  
NURSERY



HIGHER > STRONGER > BRIGHTER



**Dear Parents,**

As we celebrate the festival of Diwali & Chhath, we want to extend our warmest wishes to you and your families. In light of the holiday season, we have assigned a special Diwali homework for your child. This assignment is an attempt to channelize the creative energy of the children, and we encourage you to engage with them in this learning process. We hope you have a joyful and safe Diwali celebration with your loved ones.

Instructions for students:

1. Homework should be completed as per the given instructions, whether on A4 paper, Chart Paper, in a notebook, or on a computer.
2. It should be labelled properly indicating the name, class and section of the child.
3. Homework will be assessed based on neat handwriting, presentation, creativity, and timely submission of the work.
4. Revise the syllabus for the MAT 4 Examination and prepare thoroughly for it.
5. Spend time with family and friends to make this festive season joyful and cheerful!



Affiliation No : 530881

**GD GOENKA PUBLIC SCHOOL**  
Under the Aegis of G D Goenka Group , New Delhi **PURNEA**

# HOLIDAY ENGAGEMENT

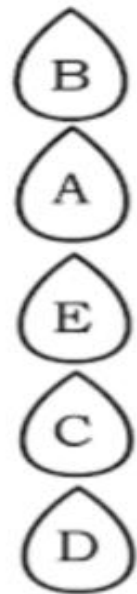
## 2024-2025

### Grade Nursery

NAME - \_\_\_\_\_

## ENGLISH

1. \* Match the same alphabet.



2. \* Circle the correct alphabet.



C

B

A



B

C

A

**HIGHER > STRONGER > BRIGHTER**



3. Match the correct letter.



O



G



B



R



F



P



M



## Hindi

1.

# अक्षर को चित्र से मिलाओ

ए .



ऐ .



ओ .



औ .











अं .











# Mathematics

## 1. Circle the correct answer:

<p>Which is longer?</p> 	<p>Which is shorter?</p> 
<p>Which is longer?</p> 	<p>Which is shorter?</p> 
<p>Which is bigger?</p> 	<p>Which is smaller?</p> 
<p>Which is smaller?</p> 	<p>Which is bigger?</p> 



2. Count the objects and write the number inside the box:

 <input data-bbox="159 784 295 1019" type="text"/>	 <input data-bbox="813 784 949 1019" type="text"/>
 <input data-bbox="159 1310 295 1545" type="text"/>	 <input data-bbox="813 1310 949 1545" type="text"/>
 <input data-bbox="159 1825 295 2060" type="text"/>	 <input data-bbox="813 1825 949 2060" type="text"/>



ATTILATION No : 530881

**GD GOENKA PUBLIC SCHOOL**  
Under the Aegis of G D Goenka Group , New Delhi **PURNEA**

## Environmental Science

1. Circle the fruits and draw a square around the vegetable:







Affiliation No : 530881

**GD GOENKA PUBLIC SCHOOL**  
Under the Aegis of G D Goenka Group , New Delhi **PURNEA**

# ART & CRAFT

## let's make a paper Diya.



### 1. INSTRUCTIONS & MATERIALS:

#### INSTRUCTIONS:

- Step 1 Take A4 sheet.
- Step 2 Cut the sheet into semi-circle shape.
- Step 3 Paste some decorative sticker with glue.

#### MATERIAL REQUIRED:

- i. 1 A4 Colourful Paper.
- ii. Fevi Stick Glue
- iii. Some decorative stickers.



Affiliation No : 530881

**GD GOENKA PUBLIC SCHOOL**  
Under the Aegis of G D Goenka Group , New Delhi **PURNEA**

HAPPY  
*Diwali*  
FESTIVAL OF LIGHTS



**HIGHER > STRONGER > BRIGHTER**