


Affiliation No : 330881

GD GOENKA PUBLIC SCHOOL Under the Aegis of G D Goenka Group , New Delhi **PURNEA**

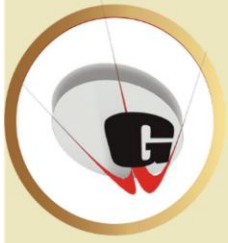
DIWALI & CHHATH HOLIDAY ENGAGEMENT

2024-25

GRADE - II



HIGHER > STRONGER > BRIGHTER



Dear Parents,

As we celebrate the festival of Diwali & Chhath, we want to extend our warmest wishes to you and your families. In light of the holiday season, we have assigned a special Diwali homework for your child. This assignment is an attempt to channelize the creative energy of the children, and we encourage you to engage with them in this learning process. We hope you have a joyful and safe Diwali celebration with your loved ones.

Instructions for students:

1. Homework should be completed as per the given instructions, whether on A4 paper, Chart Paper, in a notebook, or on a computer.
2. It should be labelled properly indicating the name, class and section of the child.
3. Homework will be assessed based on neat handwriting, presentation, creativity, and timely submission of the work.
4. Revise the syllabus for the PT3 Examination and prepare thoroughly for it.
5. Spend time with family and friends to make this festive season joyful and cheerful.





HOLIDAY ENGAGEMENT

2024-2025

Grade II

NAME - _____

ENGLISH

1. Write seven pages handwriting in 4 lines English handwriting notebook from Chapter-5 “Hurry up Jack” and “Simple Simon “.

2. Put in am , is or are in the sentences below.

1) We _____ scared .

2) He _____ in the garden .

3) I _____ drawing shapes .

4) They _____ riding their bike .

5) She _____ a nurse .

3. Draw a parrot and write five sentences about it. (In A4 sheet)

4. Write and learn the meaning of following words.

i) Voyage

ii) Wise



iii) Indeed

iv) Orchard

v) Screech

vi) Sailor

vii) Country

viii) Fair

ix) Ware

x) Penny



5. Read the passage carefully and answer the following questions.

The Cheeky Mouse

A cheeky mouse lived under a house. The lady living in the house despised mice, and wanted to get rid of them all. She put mouse traps everywhere, but the mouse under the house was wise. Every day, he would take toy mice and put them in the traps. He knew the lady had poor eye sight and would be tricked. The little cheeky mouse was so proud of himself for fooling the old lady. He went about his daily business, eating all the food he could find. "Snap!" went a trap...the poor mouse had not fooled the lady after all...

1. What does despise mean?

2. How did the lady feel about mice?

3. How did the mouse feel about his plan?

4. Choose one word to describe the mouse and explain why.

5. Do you feel sorry for the mouse? Why or why not?



HINDI

1) चित्र देखकर रिक्त स्थानों में क्रियात्मक शब्द लिखें।



i) रोहन रोज स्कूल है।

ii) वह किताब है।

iii) अध्यापक को करता है।

iv) घर आकर भोजन है।

2. अध्यापिका की सीख पाठ से दस शब्दों को लिखें एवं उनके अर्थ भी लिखें।

Handwriting practice lines consisting of multiple sets of three horizontal lines (top and bottom lines are red, the middle line is blue) for writing answers.



Affiliation No : 330881

GD GOENKA PUBLIC SCHOOL
Under the Aegis of G D Goenka Group, New Delhi **PURNEA**

Handwriting practice area consisting of 10 sets of horizontal lines. Each set includes a top red line, two middle blue lines, and a bottom red line, providing a guide for letter height and placement.

3. सात पृष्ठ हिंदी सुलेख पाठ -9 एवं पाठ 10 से कॉपी में लिखें।



MATHEMATICS

1. Solve the following.

$$\begin{array}{r} 806 \\ + 186 \\ \hline \end{array}$$

$$\begin{array}{r} 336 \\ + 215 \\ \hline \end{array}$$

$$\begin{array}{r} 613 \\ + 227 \\ \hline \end{array}$$

$$\begin{array}{r} 125 \\ + 825 \\ \hline \end{array}$$

$$\begin{array}{r} 543 \\ + 378 \\ \hline \end{array}$$

$$\begin{array}{r} 186 \\ + 697 \\ \hline \end{array}$$

$$\begin{array}{r} 493 \\ + 258 \\ \hline \end{array}$$

$$\begin{array}{r} 469 \\ + 158 \\ \hline \end{array}$$

$$\begin{array}{r} 996 \\ - 889 \\ \hline \end{array}$$

$$\begin{array}{r} 370 \\ - 348 \\ \hline \end{array}$$

$$\begin{array}{r} 681 \\ - 355 \\ \hline \end{array}$$

$$\begin{array}{r} 883 \\ - 666 \\ \hline \end{array}$$

$$\begin{array}{r} 340 \\ - 152 \\ \hline \end{array}$$

$$\begin{array}{r} 818 \\ - 679 \\ \hline \end{array}$$

$$\begin{array}{r} 802 \\ - 643 \\ \hline \end{array}$$
















$$\begin{array}{r} 852 \\ - 653 \\ \hline \end{array}$$

2. Solve the following sums in A4 sheets.

1. What is 123 more than 450?
2. What must be added to 134 to get 584?
3. Write the Key words of Addition and subtractions.
4. $678 =$ _____ hundreds + 7tens + 2ones.
5. 2 hundreds + 4 tens + 13 ones = _____



3. Solve the following word problem.

| | | |
|----|--|--|
| 1) | There were 86  walking on the ground. 45  got squashed. How many  are left? _____ | |
| 2) | I have \$95. I spend \$43. How much do I have left? \$ _____ | |
| 3) | There are 45  in a pod. There are 32  in another pod. How many  are there in all? _____ | |
| 4) | There are 62  in a farmyard. 24 more  come along. How many  are there in total? _____ | |
| 5) | A shop has 78  . It sells 58  . How many  does it have left? _____ | |
| 6) | There are 52  on one tree. There are 45  on another tree. How many  altogether on both trees? _____ | |



ENVIROMENTAL SCIENCE

Q1: Fill in the blanks by using the given words below:

pig , duck , owl , kangaroo , frog , rabbit , chicken , horse

1. The foal is the baby of the _____.



2. The duckling is the baby of the _____.



3. The owlet is the baby of the _____.



4. The piglet is the baby of the _____.



5. The joey is the baby of the _____.



6. The tadpole is the baby of the _____.



7. The bunny is the baby of the _____.



8. The chick is the baby of the _____.





2. Answer the following questions .

i) What are scavengers ? Give an example .

ii) List some ways in which we can be kind to animals.

3. Fill in the blanks with correct words.

a) The _____ (dog / lion) is a wild animal.

b) A _____ (monkey / crocodile) lives both on land and in water.

c) Animals such as _____ (Vulture / Snake) eat the flesh of dead animals.

4. Give two examples of each.

a. Animals that eat plants. _____ , _____

b) Animals that eat flesh of animals. _____ , _____

c) Animals that eat dead animals. _____ , _____

5. Identify and write the answer.

i. Name the animal _____ .

ii. Eat plant or flesh? _____ .

iii. Is it domestic or wild animal? _____ .

iv. Where do you see this animal? _____





GK

1. Fill in the blanks to complete the names of these cities.

- a) M _____MBA_____
- b) CHE_ _ _A_____
- c) KO_ _KA_ _A_____
- d) VAD_ _ _DA_ _ _A_____
- e) B_ _NGA_ _UR_____
- f) JA_ _ _PU_ _ _ _
- g) B_ _OPAL

2. Answer the following in one word.

i) Which city is also called the pink city in India?

ii) Which city is also called the city of pearls?

iii) In which city the famous monument “Gol Gumbaz” is located?

iv) Which city has the famous Victoria Memorial building?

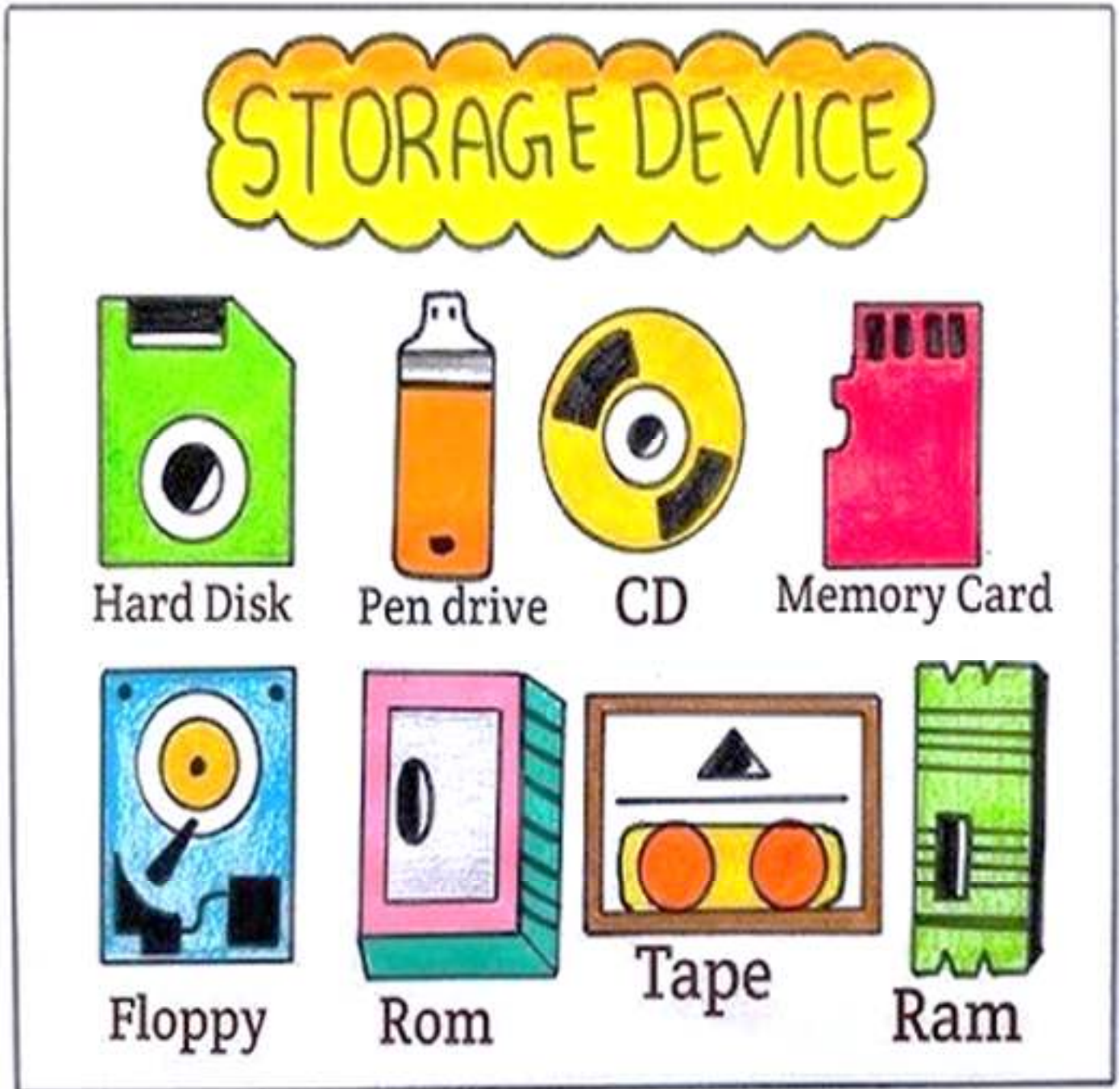
v) Which sense organ helps us to feel things by touching them?



COMPUTER

1. Prepare a colourful chart on Storage Devices.

Example:





Affiliation No : 350881

GD GOENKA PUBLIC SCHOOL
Under the Aegis of G D Goenka Group, New Delhi **PURNEA**

HAPPY
Diwali
FESTIVAL OF LIGHTS



HIGHER > STRONGER > BRIGHTER